

5 – Find a quarter **CHALLENGE**

Who has more? Explain why.



I have $\frac{1}{4}$ of £8

Rosie

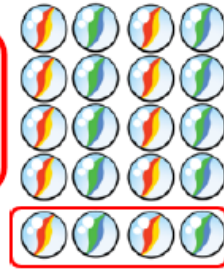


I have $\frac{1}{2}$ of £6

Whitney

Eva says,

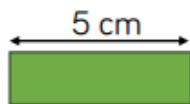
I have $\frac{1}{4}$
because I have
4 marbles.



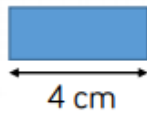
Do you agree? Explain why.

Mo has two ribbons. He cuts $\frac{1}{4}$ from each ribbon.

$\frac{1}{4}$ of ribbon A



$\frac{1}{4}$ of ribbon B



How long were Mo's whole pieces of ribbon?

Which ribbon was the longest? How much longer?